





## Grade 1 Math Revision Sheet

Name: \_\_\_\_\_ Grade & Section: \_\_\_\_\_

### 1. Count and write the numbers:



2. Write the number from 1 to 10.

1 → \_\_\_\_\_

6 \_\_\_\_\_

3. Circle the biggest number:

4                      8                      6                      3

---

3                      7                      6                      2

---

1                      5                      9                      3

4. Circle the smallest number:

4                      7                      3                      6

---

9                      2                      5                      4

---

6                      4                      3                      7

5. Arrange the numbers from small to big.

6	1
3	5
9	7

1    \_\_\_\_\_    \_\_\_\_\_    \_\_\_\_\_    \_\_\_\_\_    \_\_\_\_\_

4	5
2	8
9	7

2    \_\_\_\_\_    \_\_\_\_\_    \_\_\_\_\_    \_\_\_\_\_    \_\_\_\_\_

6. What comes in between?

3        5

---

7        9

---

2        4

**7. Add the following:**

$5 + 1 = \underline{\hspace{2cm}}$

$2 + 3 = \underline{\hspace{2cm}}$

$4 + 5 = \underline{\hspace{2cm}}$

$8 + 6 = \underline{\hspace{2cm}}$

$3 + 9 = \underline{\hspace{2cm}}$

$7 + 0 = \underline{\hspace{2cm}}$

**8. Subtract the following:**

$5 - 0 = \underline{\hspace{2cm}}$

$7 - 6 = \underline{\hspace{2cm}}$

$10 - 6 = \underline{\hspace{2cm}}$

$3 - 3 = \underline{\hspace{2cm}}$

$9 - 4 = \underline{\hspace{2cm}}$

$8 - 1 = \underline{\hspace{2cm}}$