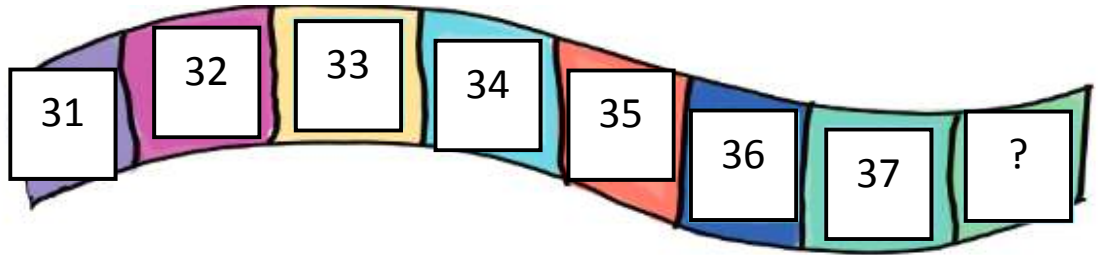


1. What number comes next?

(3 marks)

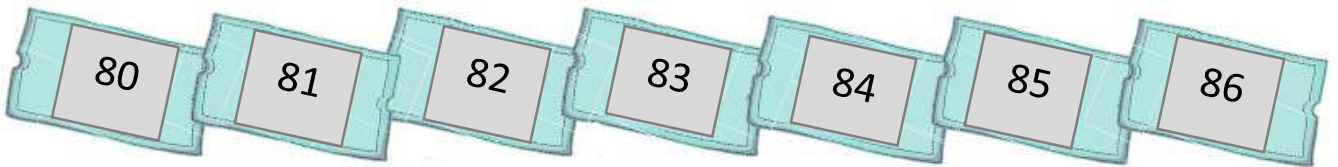
- A. 38
- B. 40
- C. 42
- D. 43



2. These numbers are counting forwards by?


(3 marks)

- A. 1
- B. 3
- C. 5
- D. 10



3. Draw 4 more marbles.


(5 marks)



4. How many rulers are there?

(3 marks)

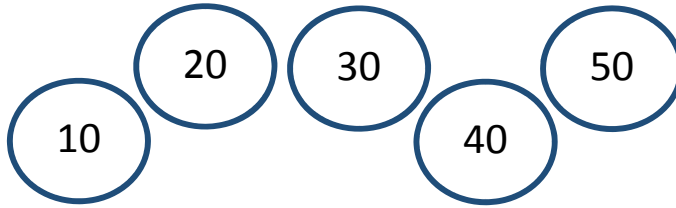
- A. 5
- B. 11
- C. 15
- D. 19



5. These numbers are skip counting forwards by?

(3 marks)


- A. 2
- B. 3
- C. 5
- D. 10



6. **25** has 2 tens and how many **ones**?

(3 marks)

- A. 2
- B. 3
- C. 4
- D. 5



7.



is...



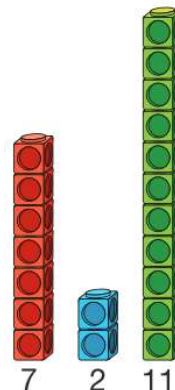
(3 marks)

- A. more than
- B. less than
- C. the same as
- D. not the same as

8. Order these numbers from lowest to highest?

(3 marks)

- A. 7, 11, 2
- B. 11, 2, 7
- C. 11, 7, 2
- D. 2, 7, 11



9. How much money is shown?

(5 marks)

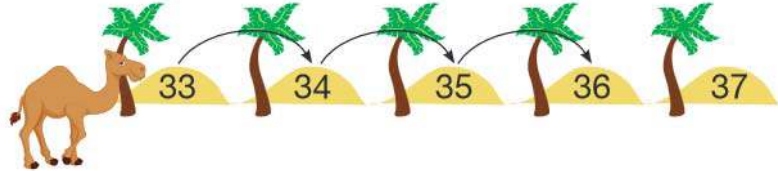


AED _____

10. $33 + 3 =$

(3 marks)

- A. 27
- B. 30
- C. 36
- D. 38



11. and make 10.

(5 marks)

12. $3 + 1 =$

$4 - 3 =$

(5 marks)

$2 + 2 =$

$5 - 2 =$

$4 + 1 =$

13. Double 5 is (3 marks)

- A. 3
- B. 6
- C. 10
- D. 12

14. $9 + 6 =$ (3 marks)

- A. 10
- B. 11
- C. 12
- D. 15

15. $10 - 6 =$ because $6 +$ $= 10$ (3 marks)

- A. 3
- B. 4
- C. 9
- D. 10

16. Today is **Saturday 6th August** . Tomorrow will be... (3 marks)

- A. Sunday 7th August
- B. Monday 8th August
- C. Tuesday 9th August
- D. Wednesday 10th August

17. What month is shown?

2018 APRIL						
SUNDAY	MONDAY	TUESDAY	WEDNESDAY	THURSDAY	FRIDAY	SATURDAY
1	2	3	4	5	6	7
8	9	10	11	12	13	14
15	16	17	18	19	20	21
22	23	24	25	26	27	28
29	30					

(3 marks)

- A. January
- B. February
- C. March
- D. April

18. When would this take place?



(3 marks)

- A. morning
- B. afternoon
- C. late afternoon
- D. night

19. What time is shown?

_____ o'clock



(5 marks)

20. This water bottle is?

(3 marks)

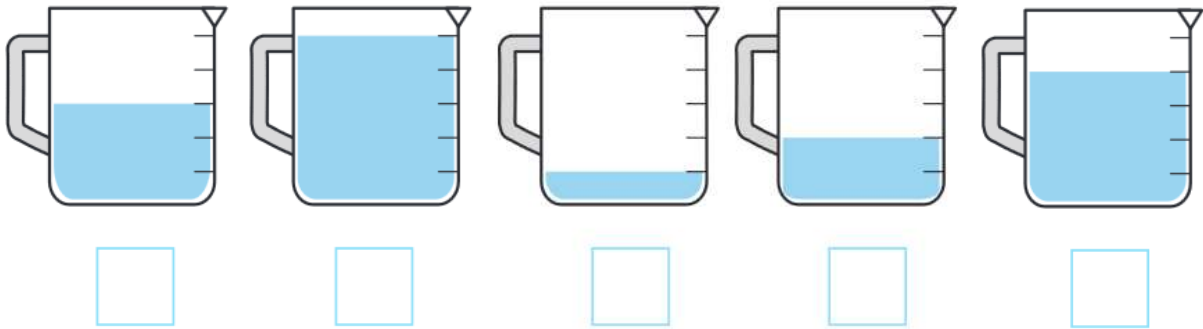
- A. Full
- B. Half full
- C. Empty
- D. Unfilled



21. Order these jugs from **least** to **most** full.

(5 marks)

1 is least full and **5 is most** full.



Class 1 A's Favourite Juice



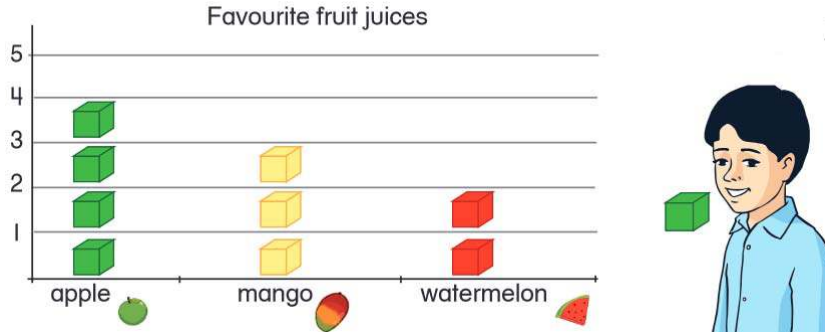
22. How many students liked orange?

(3 marks)

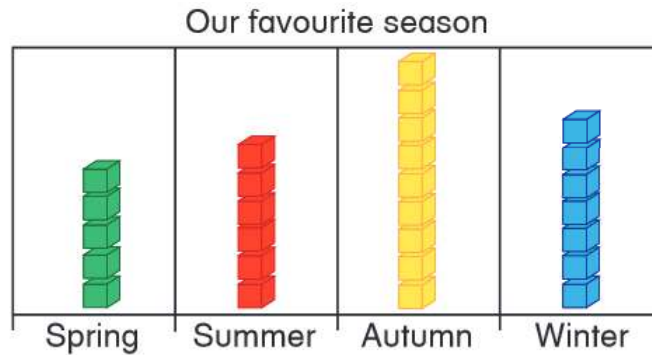
- A. 4
- B. 5
- C. 9
- D. 10



23. Rashed's favourite fruit juice is apple. (5 marks)
 Draw where he should put his block.



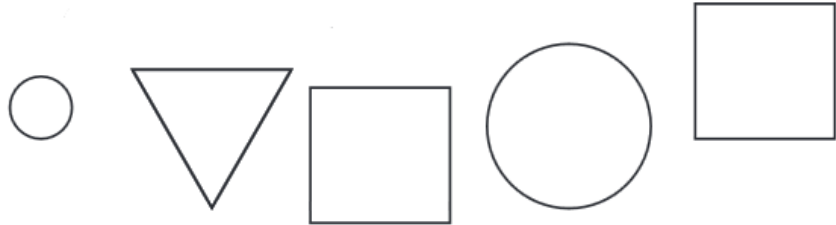
Use this graph to answer questions 24 and 25.



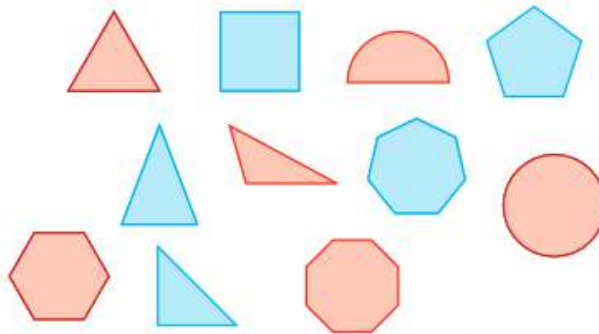
24. How many people like winter? (3 marks)
- A. 2
 - B. 5
 - C. 7
 - D. 10
25. Which is the least popular season? (3 marks)
- A. Spring
 - B. Summer
 - C. Autumn
 - D. Winter

26. How many shapes have 4 corners? (3 marks)

- A. 1
- B. 2
- C. 5
- D. 7



27. ✓ Tick the red shapes. (5 marks)



28. How many cylinders are there? (3 marks)

- A. 2
- B. 4
- C. 6
- D. 10

